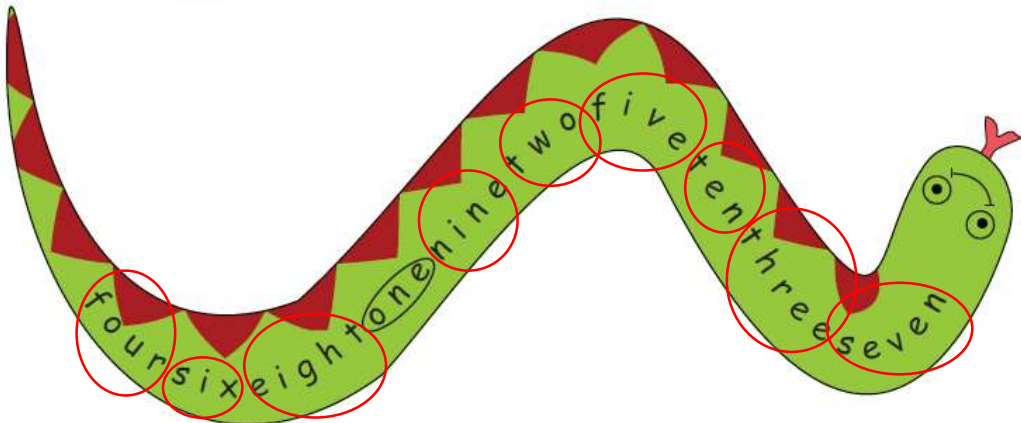


Activity book p. 26 ex. 1











1. Find and write the numbers



- | | | | | |
|-------|-------|-------|-------|-------|
| One | two | three | four | five |
| _____ | _____ | _____ | _____ | _____ |
| Six | seven | eight | nine | ten |
| _____ | _____ | _____ | _____ | _____ |

Activity book p. 27 ex. 3

3. Match

a)	 two	 10
b)	 ten	 9
c)	 nine	 8
d)	 eight	 4
e)	 four	 2

Red lines connect the bees to the sunflowers: Bee (a) to Sunflower (8), Bee (b) to Sunflower (2), Bee (c) to Sunflower (4), Bee (d) to Sunflower (9), and Bee (e) to Sunflower (10).

Activity book p. 28 ex. 4, 5 (look at the example)

4. Do the puzzle

$4-2= \dots\dots$
 $3+2= \dots\dots$
 $2 \times 2= \dots\dots$
 $\dots\dots \times 2=12$
 $1 \times 1= \dots\dots$
 $4+3= \dots\dots$
 $\dots\dots \times 3=9$
 $4 \times 2= \dots\dots$
 $12-3= \dots\dots$
 $29-19= \dots\dots$

5. Find the answer

Anna	8
Don	7
Emma	10
Zoe	6
Tom	9

- How old is Anna?
She is seven.
- How **old** is Don?
He **is nine.**
- How old** is Emma?
She **is ten.**
- How old** is Tom?
He **is six.**
- How old** is Zoe?
She is eight.